

Grade: 4

CCSS Domain: Operations and Algebraic Thinking

Miguel earned \$32 delivering newspapers. He also made \$20 walking a dog.

Then, he bought a new bicycle helmet for \$18.

How much money does Miguel have left?

- A. \$52
- B. \$38
- C. \$34

Maddie's hand is about 4 inches.

Her horse is about 16 hands tall.

About how tall is her horse?

- A. 48 inches
- B. 20 inches
- C. 60 inches

Grade: 4

CCSS Domain: Number and Operations in Base Ten

5000 is how many tens?

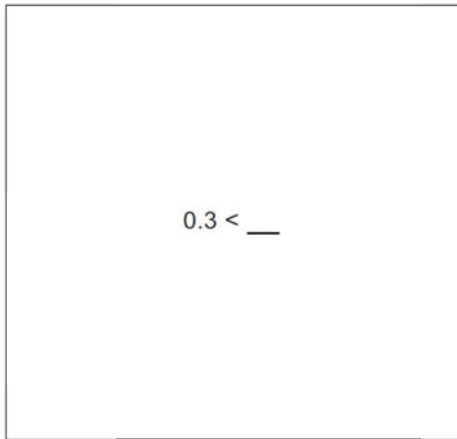
- A. 3
- B. 500
- C. 50

$27 \times 32 = \underline{\quad}$

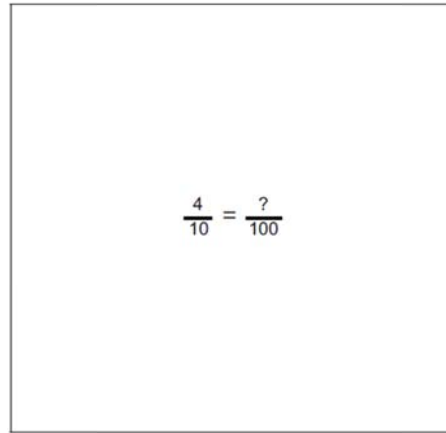
- A. 59
- B. 864
- C. 854

Grade: 4

CCSS Domain: Number and Operations-Fractions



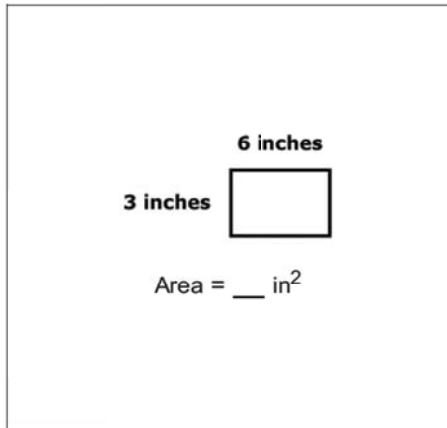
- A. 0.5
- B. 0
- C. 0.2



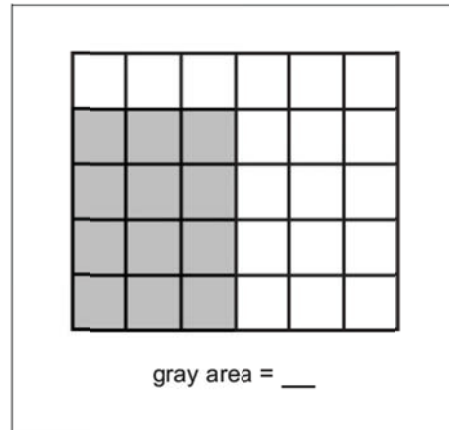
- A. 40
- B. 4
- C. 400

Grade: 4

CCSS Domain: Measurement and Data



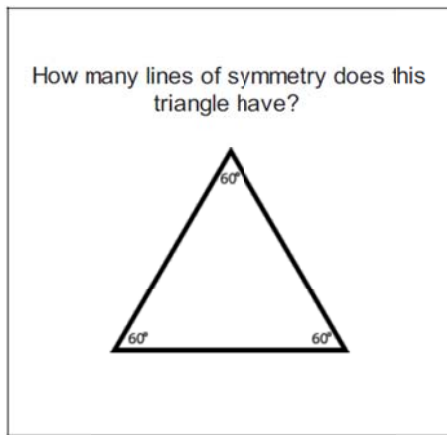
- A. 9
- B. 24
- C. 18



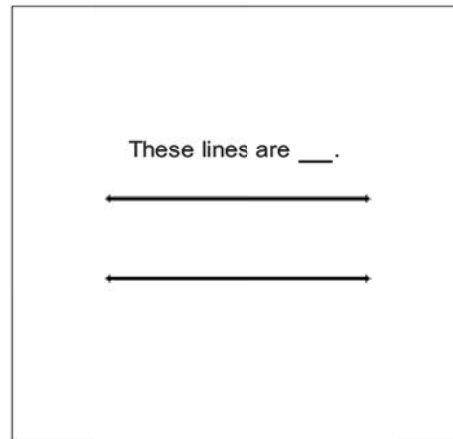
- A. 3×3
- B. 3×4
- C. 5×2

Grade: 4

CCSS Domain: Geometry



- A. 3
- B. 2
- C. 1



- A. intersecting
- B. parallel
- C. perpendicular